

Quiz 4 SHOW ALL WORK

Nov 9, 2018

[15] 1.) Solve $ty' + 4y = t$

$$1y' + \frac{4}{t}y = 1$$

$$u(t) = e^{\int \frac{4}{t} dt} = e^{4 \ln|t|} = e^{\ln(|t|^4)} = t^4.$$

$$\text{Let } u(t) = t^4$$

$$t^4 y' + 4t^3 y = t^4$$

$$(t^4 y)' = t^4 \quad \text{Check this step: } (t^4 y)' = t^4 y' + 4t^3 y$$

$$\int (t^4 y)' dt = \int t^4 dt$$

$$t^4 y = \frac{t^5}{5} + C$$

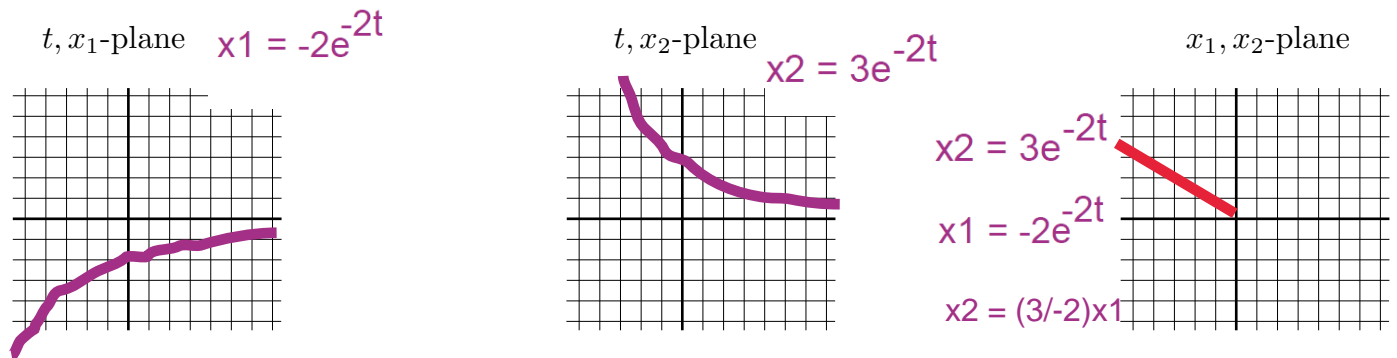
$$y = \frac{t}{5} + Ct^{-4}$$

Answer: $y = \frac{t}{5} + Ct^{-4}$

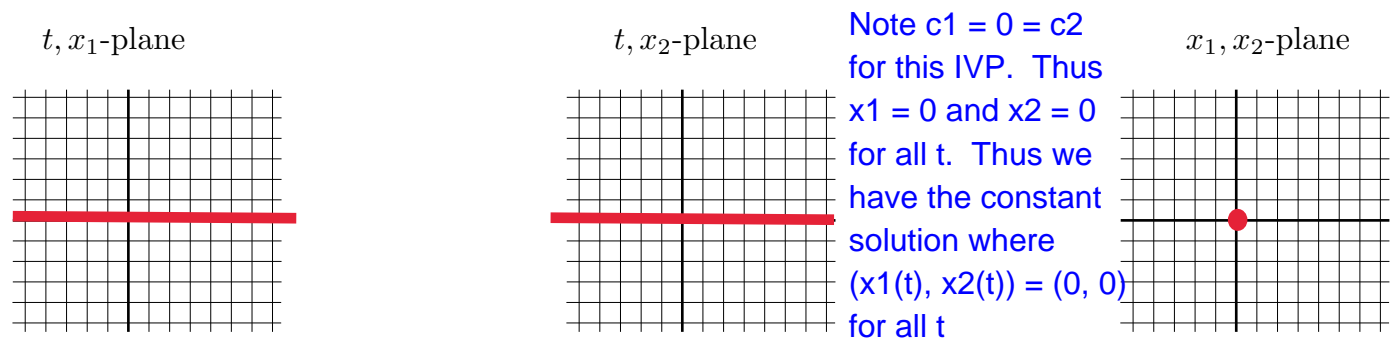
2.) Give that the solution to $\mathbf{x}' = \begin{bmatrix} 1 & 2 \\ 3 & 0 \end{bmatrix} \mathbf{x}$ is $\mathbf{x} = c_1 \begin{bmatrix} 1 \\ 1 \end{bmatrix} e^{3t} + c_2 \begin{bmatrix} -2 \\ 3 \end{bmatrix} e^{-2t}$

Note $c_1 = 0$ and $c_2 = 1$ for this IVP.

[7] 2a.) Graph the solution to the IVP $\begin{bmatrix} x_1(0) \\ x_2(0) \end{bmatrix} = \begin{bmatrix} -2 \\ 3 \end{bmatrix}$ in the t, x_1 -plane and t, x_2 -plane. Thus $x_1 = -2e^{-2t}$ and $x_2 = 3e^{-2t}$



[3] 2b.) Graph the solution to the IVP $\begin{bmatrix} x_1(0) \\ x_2(0) \end{bmatrix} = \begin{bmatrix} 0 \\ 0 \end{bmatrix}$ in the t, x_1 -plane, t, x_2 -plane, and x_1, x_2 -plane.

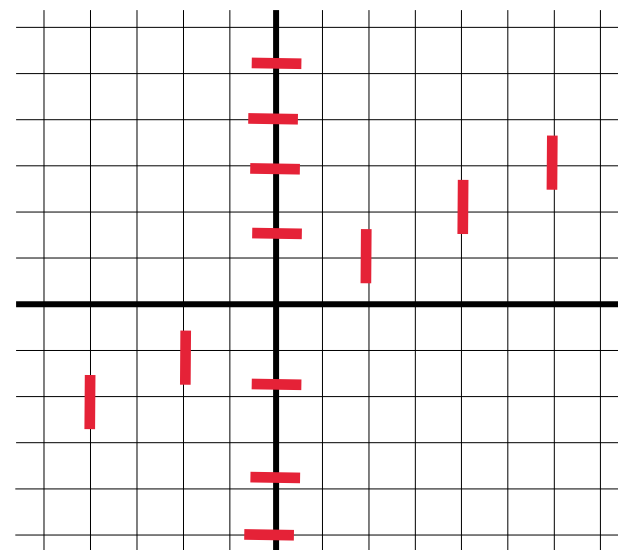


Note $c_1 = 0 = c_2$ for this IVP. Thus $x_1 = 0$ and $x_2 = 0$ for all t . Thus we have the constant solution where $(x_1(t), x_2(t)) = (0, 0)$ for all t .

[2] 2c.) The equilibrium solution for this system of equations is $\begin{bmatrix} x_1 \\ x_2 \end{bmatrix} = \begin{bmatrix} 0 \\ 0 \end{bmatrix}$.

[3] 2d.) $\frac{dx_2}{dx_1} = \frac{3x_1}{1x_1 + 2x_2}$

[2] 2e.) Plot several direction vectors where the slope is 0 and where slope is vertical.



[10] 2f.) Graph several trajectories.

