

Quiz 4 SHOW ALL WORK

Nov 9, 2018

[15] 1.) Solve $ty' + 4y = t$

Answer: _____

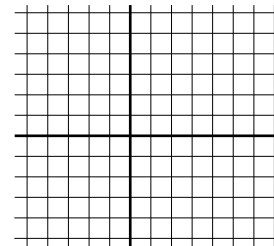


2.) Give that the solution to $\mathbf{x}' = \begin{bmatrix} 1 & 2 \\ 3 & 0 \end{bmatrix} \mathbf{x}$ is $\mathbf{x} = c_1 \begin{bmatrix} 1 \\ 1 \end{bmatrix} e^{3t} + c_2 \begin{bmatrix} -2 \\ 3 \end{bmatrix} e^{-2t}$

[7] 2a.) Graph the solution to the IVP $\begin{bmatrix} x_1(0) \\ x_2(0) \end{bmatrix} = \begin{bmatrix} -2 \\ 3 \end{bmatrix}$ in the

t, x_1 -plane

t, x_2 -plane

x_1, x_2 -plane

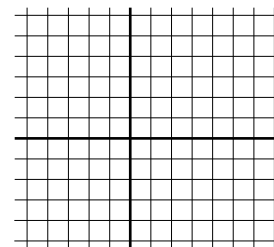

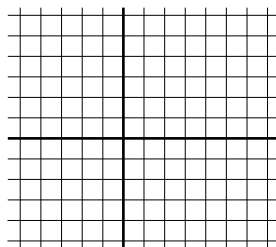


[3] 2b.) Graph the solution to the IVP $\begin{bmatrix} x_1(0) \\ x_2(0) \end{bmatrix} = \begin{bmatrix} 0 \\ 0 \end{bmatrix}$ in the

t, x_1 -plane

t, x_2 -plane

x_1, x_2 -plane



[2] 2c.) The equilibrium solution for this system of equations is $\begin{bmatrix} x_1 \\ x_2 \end{bmatrix} = \begin{bmatrix} \quad \\ \quad \end{bmatrix}$.

[3] 2d.) $\frac{dx_2}{dx_1} = \underline{\hspace{2cm}}$

[2] 2e.) Plot several direction vectors where the slope is 0 and where slope is vertical.

[10] 2f.) Graph several trajectories.

